

# Comparing numbers (2)



**1** Which is the smallest number in each pair?

Tick your answer.

a)

Tens	Ones
4	6

Tens	Ones
5	1

b)

Tens	Ones
7	2

Tens	Ones
7	1

How did you know which number to tick?

**2** Circle the greater number in each pair.

a)

37	81
----	----

b)

90	9
----	---

c)

16	72
----	----

**3** Write  $<$ ,  $>$  or  $=$  to compare the numbers.

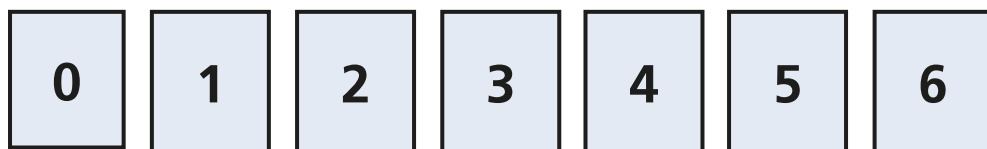
a) 19  41

b) 51  24

c) 79  80

d) 100  93

**4** Use the digit cards.



Make a number greater than 25

Make a number less than 72


Make a number greater than 59

Talk about your answers.






**5** Ron, Sam and Kim have each made a number.




**Ron**

My number has 7 tens  
and some ones.



**Sam**

My number has 8 tens  
and some ones.



**Kim**

My number has 6 tens  
and some ones.

a) Who has made the smallest number?

\_\_\_\_\_

b) Who has made the greatest number?

\_\_\_\_\_

Talk about it with a partner.

